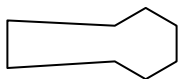




Determine which letter BEST represents the shapes that were used to create the figure shown.

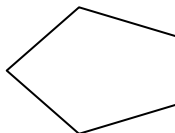
Answers

1)



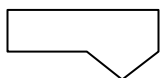
- A. pentagon & heptagon
- B. triangle & quadrilateral
- C. quadrilateral & hexagon
- D. triangle & octagon

2)



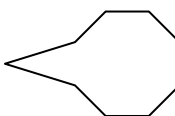
- A. octagon & square
- B. square & pentagon
- C. triangle & octagon
- D. quadrilateral & triangle

3)



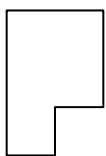
- A. quadrilateral & rectangle
- B. octagon & square
- C. hexagon & triangle
- D. quadrilateral & triangle

4)



- A. pentagon & square
- B. rectangle & triangle
- C. octagon & quadrilateral
- D. triangle & octagon

5)



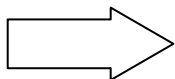
- A. square & pentagon
- B. heptagon & square
- C. quadrilateral & quadrilateral
- D. quadrilateral & heptagon

6)



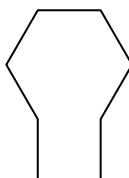
- A. triangle & rectangle
- B. pentagon & octagon
- C. hexagon & pentagon
- D. octagon & square

7)



- A. heptagon & triangle
- B. triangle & quadrilateral
- C. rectangle & hexagon
- D. square & rectangle

8)



- A. rectangle & pentagon
- B. rectangle & hexagon
- C. heptagon & triangle
- D. rectangle & octagon

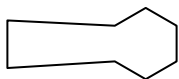
- 1. _____
- 2. _____
- 3. _____
- 4. _____
- 5. _____
- 6. _____
- 7. _____
- 8. _____



Determine which letter BEST represents the shapes that were used to create the figure shown.

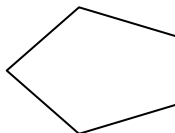
Answers

1)



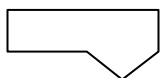
- A. pentagon & heptagon
- B. triangle & quadrilateral
- C. quadrilateral & hexagon
- D. triangle & octagon

2)



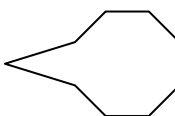
- A. octagon & square
- B. square & pentagon
- C. triangle & octagon
- D. quadrilateral & triangle

3)



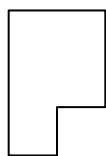
- A. quadrilateral & rectangle
- B. octagon & square
- C. hexagon & triangle
- D. quadrilateral & triangle

4)



- A. pentagon & square
- B. rectangle & triangle
- C. octagon & quadrilateral
- D. triangle & octagon

5)



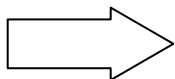
- A. square & pentagon
- B. heptagon & square
- C. quadrilateral & quadrilateral
- D. quadrilateral & heptagon

6)



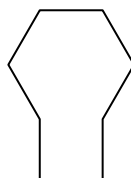
- A. triangle & rectangle
- B. pentagon & octagon
- C. hexagon & pentagon
- D. octagon & square

7)



- A. heptagon & triangle
- B. triangle & quadrilateral
- C. rectangle & hexagon
- D. square & rectangle

8)



- A. rectangle & pentagon
- B. rectangle & hexagon
- C. heptagon & triangle
- D. rectangle & octagon

- 1. **C**
- 2. **D**
- 3. **D**
- 4. **D**
- 5. **C**
- 6. **A**
- 7. **B**
- 8. **B**